






# Number components

Match the number components with their number.



5



4



2



3





6







1

# Addition

Count and draw the circles then find the sum.

 $+$  $\underline{\quad} + \underline{\quad} = \underline{\quad}$

 $+$  $\underline{\quad} + \underline{\quad} = \underline{\quad}$

 $+$  $\underline{\quad} + \underline{\quad} = \underline{\quad}$

$+$  $\underline{3} + \underline{5} = \underline{\quad}$

# Subtraction

Find the difference.




$$\underline{5} - \underline{3} = \underline{\quad}$$



$$\underline{7} - \underline{6} = \underline{\quad}$$



$$\underline{4} - \underline{2} = \underline{\quad}$$



$$\underline{6} - \underline{1} = \underline{\quad}$$