


Comparing length (taller and shorter)

Look at the questions and answer them by circling the correct picture.

Which is taller?



Which is shorter?



Which is shorter?



Which is taller?




Comparing mass (light and heavy)

Circle the object that weighs more.

School bus



Paper clip



Book



Boy



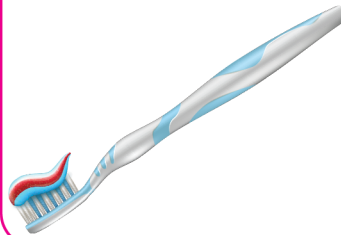
Computer



Cup



Toothbrush



Toy Train



Circle the object that weighs less.

Car



CD



Mobile Phone



Clip



Nail



Hammer



Sunglasses



Books



Time

Write the time below each clock.

1



2



3



4



5



6



Counting money

Find the sum.



=



=



=

Days of the week

Arrange the days of the week in the correct order.

1

2

3

4

5

6

7

Saturday

Friday

Monday

Thursday

Wednesday

Sunday

Tuesday