

Metric units

Convert to the units shown.

1 494 L = _____ mL

2 2.07 L = _____ mL

3 7.3 L = _____ mL

4 20.6 L = _____ mL

5 97.6 L = _____ mL

6 0.70 L = _____ mL

7 8.3 L = _____ mL

8 39.2 kg = _____ g

9 935 kg = _____ g

10 45.8 L = _____ mL

11 1,667 mL = _____ L

12 18,924 g = _____ kg

13 39,523 g = _____ kg

14 39,917 mm = _____ cm

15 28,737 mL = _____ L

16 3,234 mm = _____ cm

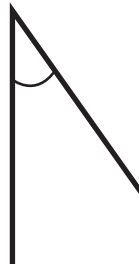
Measuring angles

Measure the angle with a protractor. Is it acute, obtuse or a right angle?


1



2



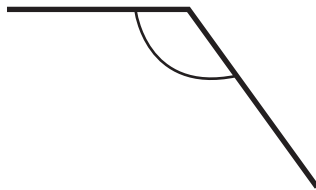
3



4



5



6

